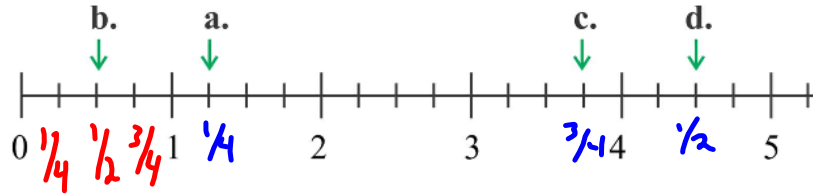
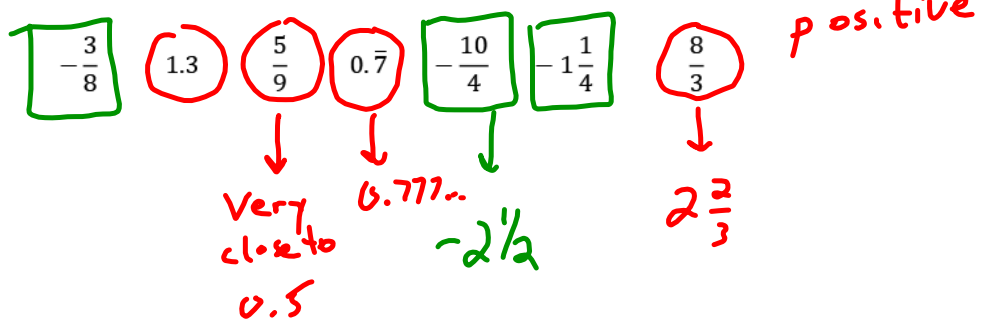


Ex. 2: Write the fraction represented by each letter.

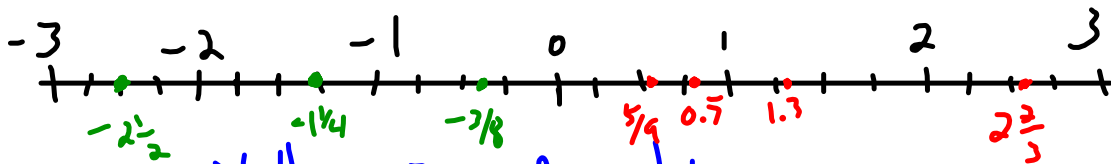


b) $\frac{1}{2}$ a) $1\frac{1}{4}$ c) $3\frac{3}{4}$ d) $4\frac{1}{2}$

Ex. 3: Without using a calculator, order these rational numbers from least to greatest.



$-2\frac{1}{2}, -1\frac{1}{4}, -\frac{3}{8}, \frac{5}{9}, 0.7, 1.3, 2\frac{2}{3}$



Assignment: Yellow 3.1 Practice